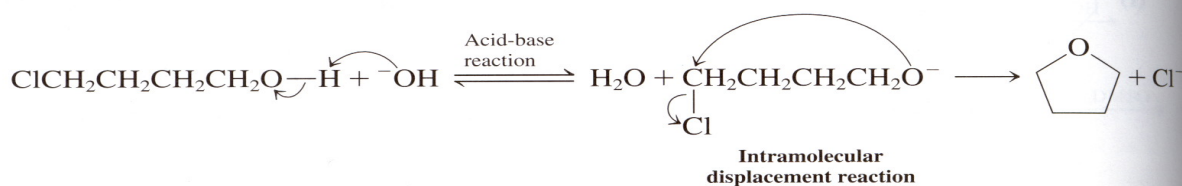
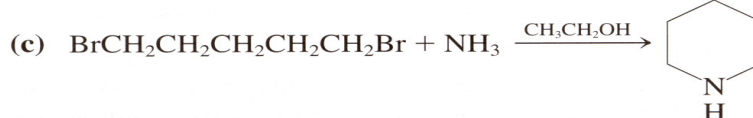
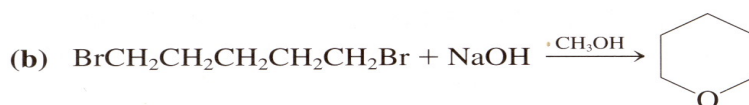


44. Rings are readily prepared by means of intramolecular S_N2 reactions. An example and its mechanism are:



Explain the outcome of the following transformations mechanistically. (**Hint:** Notice in the example how an acid-base reaction leads to a stronger nucleophile at one end of the molecule. Use this in your answers.)



correction

